



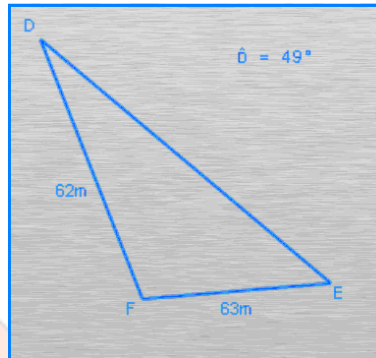
# CAMI Wiskunde: Graad 11

## GRAAD 11 Sinus-, cosinus- en oppervlaktereël

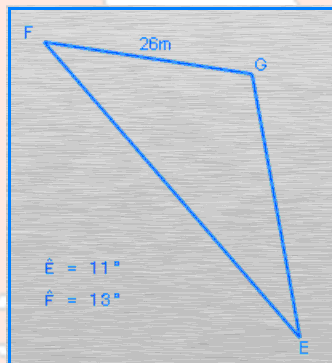
### 11.7 Sinusreël

#### 1. Sinusreël

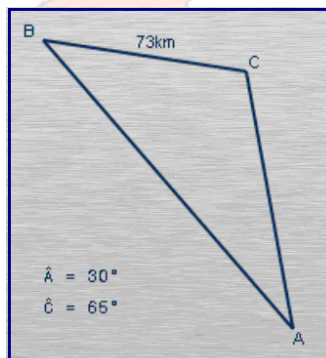
(a) Gebruik die sinusreël om die grootte van  $\hat{E}$  te bereken.



(b) Gebruik die sinusreël om die lengte van f te bereken.



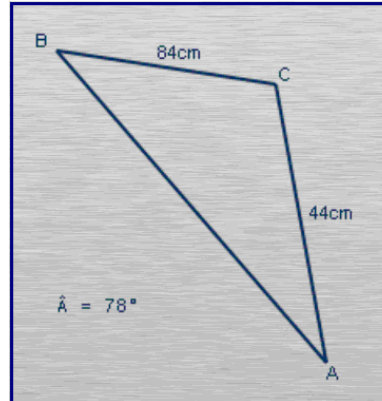
(c) Gebruik die sinusreël om die lengte van c te bereken.



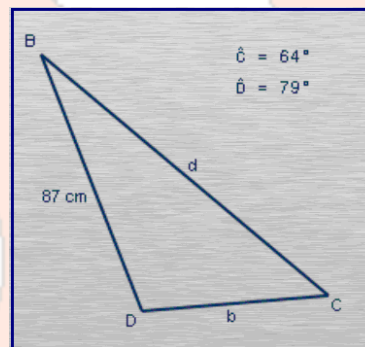


# CAMI Wiskunde: Graad 11

(d) Gebruik die sinusreël om die grootte van  $\hat{B}$  te bereken.



(e) Gebruik die sinusreël om die onbekende waardes te bereken.





# CAMI Wiskunde: Graad 11

## MEMO

Antwoorde korrek tot twee desimale plekke.

### 1. Sinusreël [7.7.3.1; 7.7.3.2; 7.7.3.3; 7.7.3.4]

(a)

$$\sin E = \frac{e \times \sin D}{d}$$

$$\sin E = \frac{62 \times \sin 49^\circ}{63}$$

$$\therefore \hat{E} = 47.96^\circ$$

(b)

$$f = \frac{e \times \sin F}{\sin E}$$

$$f = \frac{26 \times \sin 13^\circ}{\sin 11^\circ}$$

$$f = 30.65m$$

(c)

$$\frac{c}{\sin C} = \frac{a}{\sin A}$$

$$c = \frac{a \times \sin C}{\sin A}$$

$$c = \frac{73 \times \sin 65^\circ}{\sin 30^\circ}$$

$$c = 132.32km$$

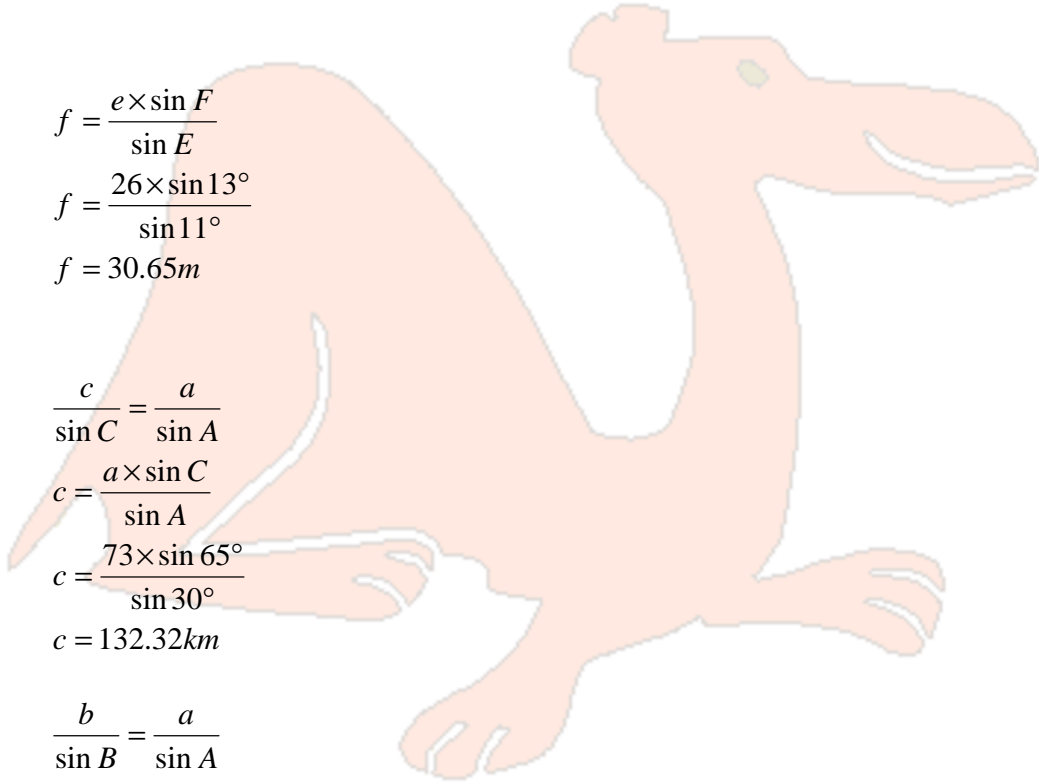
(d)

$$\frac{b}{\sin B} = \frac{a}{\sin A}$$

$$\sin B = \frac{b \times \sin A}{a}$$

$$\sin B = \frac{44 \times \sin 78^\circ}{84}$$

$$\therefore \hat{B} = 30.82^\circ$$





# CAMI Wiskunde: Graad 11

(e)

$$\hat{B} = 180^\circ - \hat{C} - \hat{D}$$

$$\hat{B} = 37^\circ$$

$$\frac{b}{\sin B} = \frac{c}{\sin C}$$

$$b = \frac{87 \times \sin 37^\circ}{\sin 64^\circ}$$

$$b = 58.25 \text{ cm}$$

$$\frac{d}{\sin D} = \frac{c}{\sin C}$$

$$d = \frac{87 \times \sin 79^\circ}{\sin 64^\circ}$$

$$d = 95.02 \text{ cm}$$

