



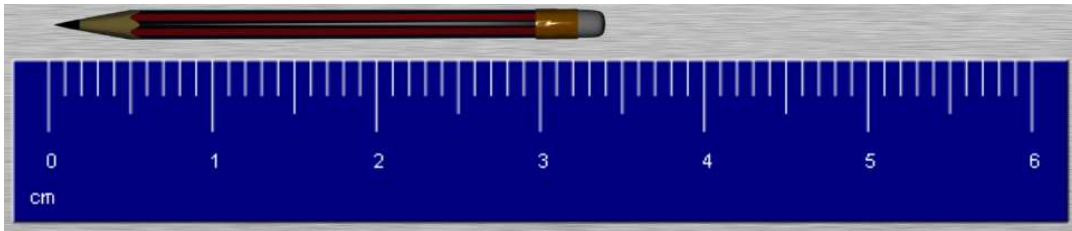
Drukbare assesserings CAMI Wiskunde: Graad 4

4. Meting


4.1 Lengte

1.1 Wat is the lengte (cm) van die potlood?

(a)




(b)

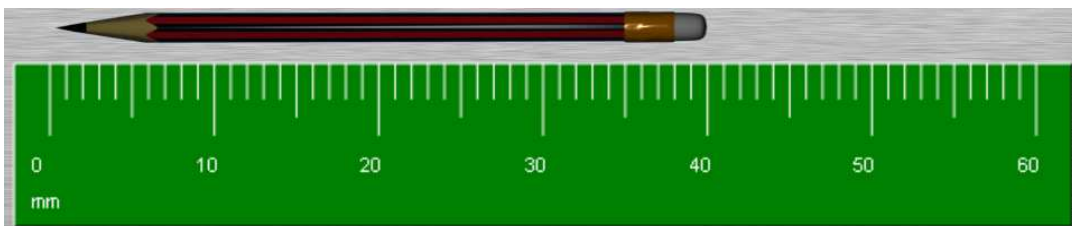


1.2 Wat is the lengte (mm) van die potlood?

(a)



(b)





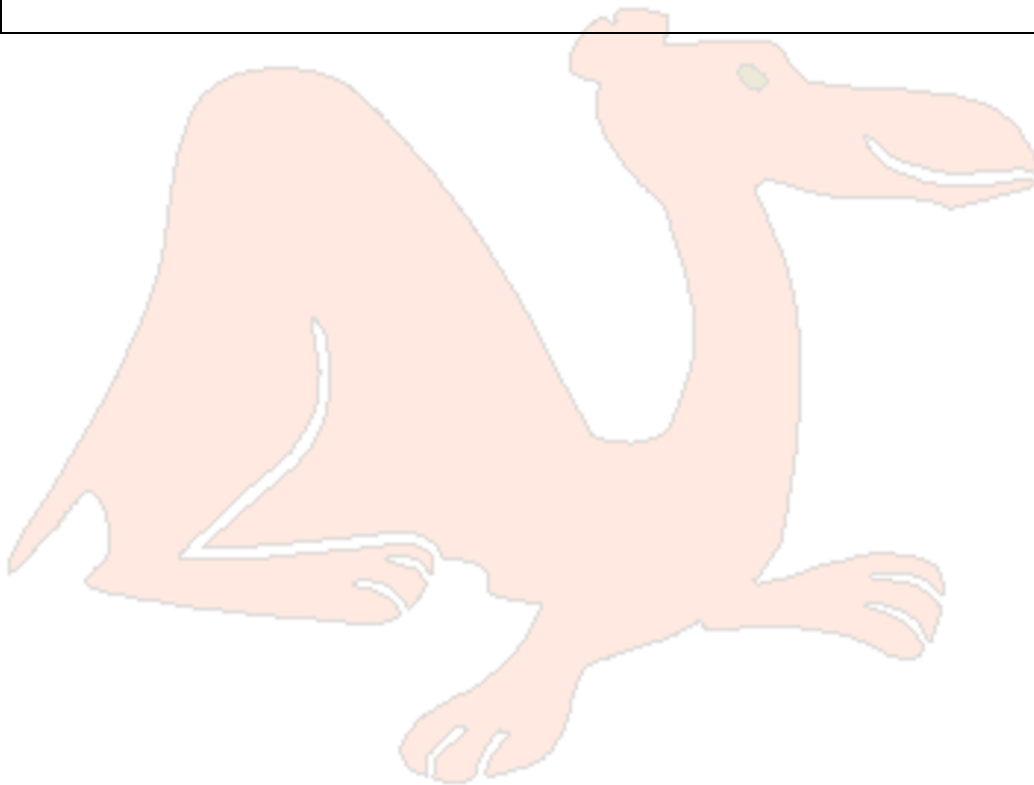
Drukbare assesserings CAMI Wiskunde: Graad 4

1.3 Voltooi die tabel deur die eenhede te herlei.

mm	cm	m	km
570			
		520	
	300		
			870

1.4 Probleemoplossing.

Thuli loop 448 cm in agt tree. Hoe lank is elke tree?





Drukbare assesserings CAMI Wiskunde: Graad 4

MEMO

1.1 Meting. [9.1.1.2]

- (a) 3,4 cm
- (b) 3,9 cm

1.2 Meting. [9.1.1.2]

- (a) 18 mm
- (b) 40 mm

1.3 Herleidings [9.1.2.1]

m

mm	cm	m	km
570	57	0,57	0,00057
520 000	52 000	520	0,52
30	300	3	0,003
870 000 000	87 000 000	870 000	870

1.4 Probleemoplossing. [3.8.6.1]

$$448 \text{ cm} \div 8 = 56 \text{ cm}$$