




Drukbare assesserings CAMI Wiskunde: Graad 4

3. Ruimte en vorm

3.3 Simmetrie

1.1 Teken die vertikale en/of horisontale simmetrielyne vir die volgende vorms.


(a)



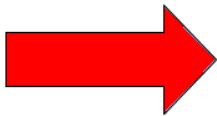
(b)




(c)




(d)



(e)



(f)




1.2 Hoeveel lyne van simmetrie het die volgende vorms?

(a)



(b)



(c)






Drukbare assesserings CAMI Wiskunde: Graad 4

1.3 Teken die tweede helfte van elke simmetriese vorm.

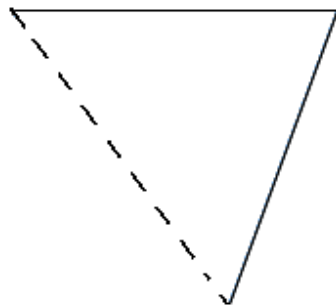
(a)



(b)



(c)



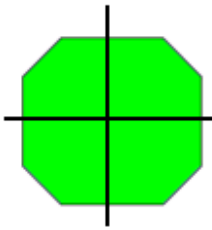


Drukbare assesserings CAMI Wiskunde: Graad 4

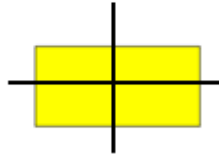
MEMO

1.1 Teken die vertikale en/of horisontale simmetrielyne vir die volgende vorms.
[8.10.1.3; 8.10.1.4]

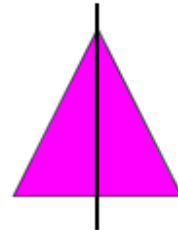
(a)



(b)



(c)



(d)



(e)



(f)



1.2 Hoeveel lyne van simmetrie het die volgende vorms? [8.10.1.5]

(a)

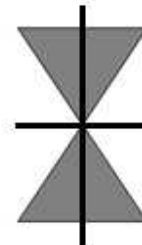


(b)



None

(c)

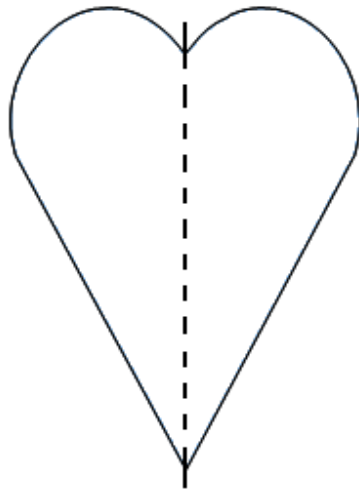




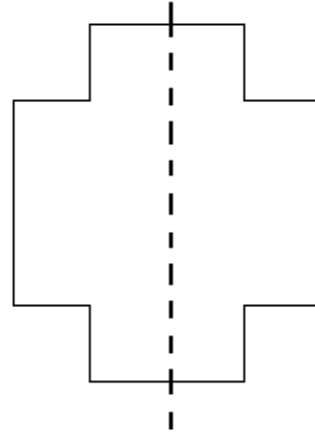
Drukbare assesserings CAMI Wiskunde: Graad 4

1.3 Teken die tweede helfte van elke simmetriese vorm. [8.10.2.1]

(a)



(b)



(c)

