



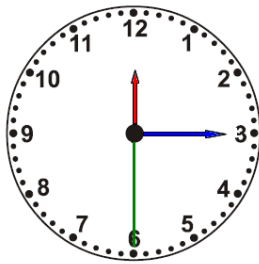
Drukbare assesserings CAMI Wiskunde: Graad 4

4. Meting

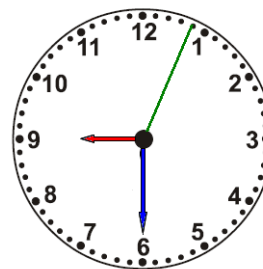
4.4 Tyd in ure, minute en sekondes

1.1 Lees tyd in 12-uur formaat. Gee antwoord in digitale vorm.

(a)



(b)



1.2 Lees tyd in 24-uur digitale vorm.

(a)

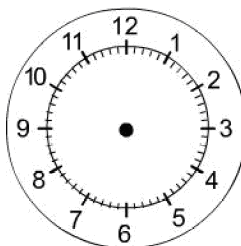
22 : 10 : 08

(b)

10 : 12 : 35

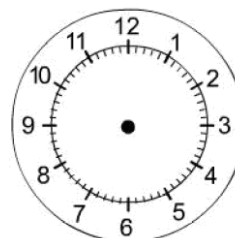
1.3 Dui die volgende tye op die gegewe horlosies aan.

(a)



15 : 15 : 10

(b)

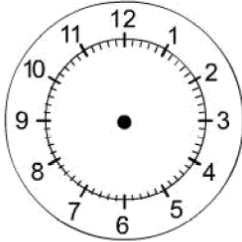


24 : 05 : 00

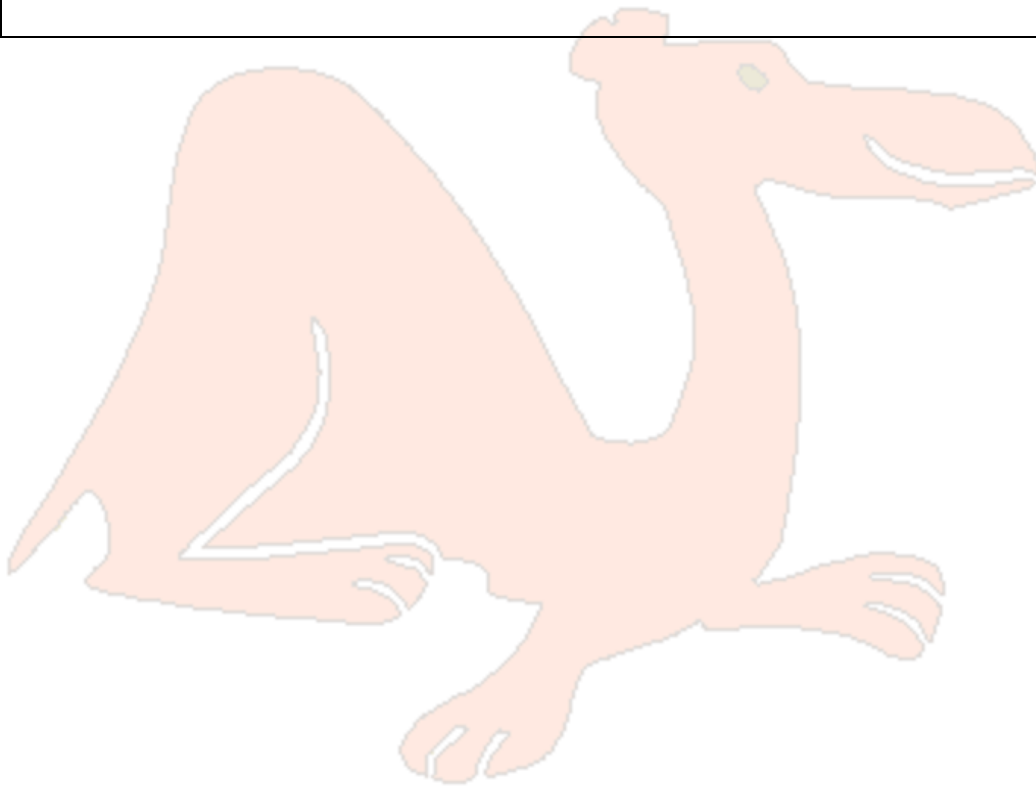


Drukbare assesserings CAMI Wiskunde: Graad 4

(c)



05 : 12 : 35



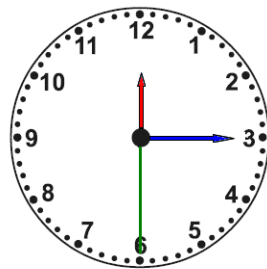


Drukbare assesserings CAMI Wiskunde: Graad 4

MEMO

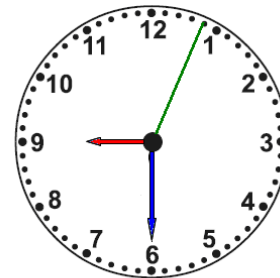
1.1 Lees tyd in 12-uur formaat. [9.2.2.9]

(a)



12 : 15 : 30

(b)



09 : 30 : 04

1.2 Lees tyd in 24-uur digitale vorm. [9.2.2.9]

(a)

22 : 10 : 08

Tien minute en agt sekondes oor 10 nm

(b)

10 : 12 : 35

Twaalf minute vyf en dertig sekondes oor tien vm

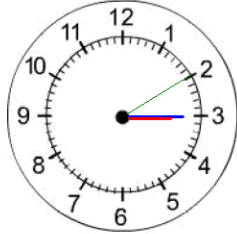
1.3 Dui die volgende tye op die gegewe horlosies aan.

(a)

(b)



Drukbare assesserings CAMI Wiskunde: Graad 4

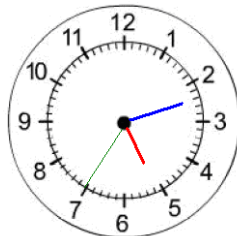


15 : 15 : 10



24 : 05 : 00

(c)



05 : 12 : 35

