



Drukbare assesserings CAMI Wiskunde: Graad 5

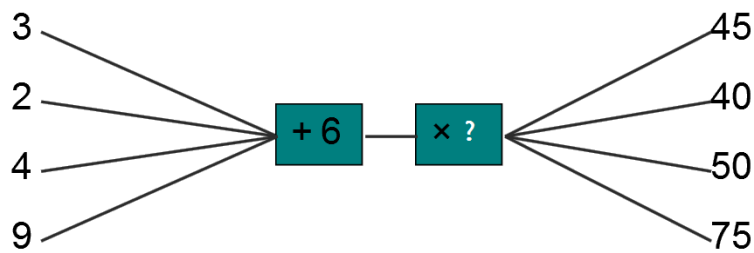
Getalpatrone

1. Gee die volgende getal in die getalpatroon.

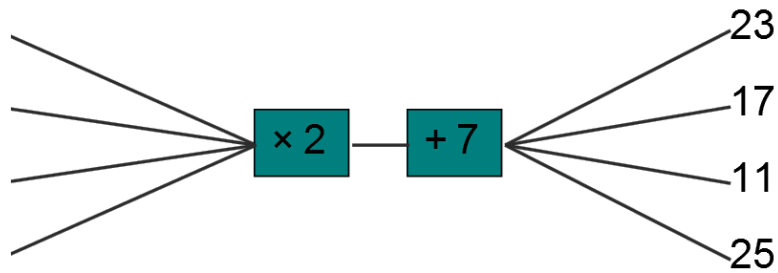
- (a) 29 ; 33 ; 37 ; 41 ;
- (b) 6 ; 12 ; 18 ; 24 ;
- (c) 26 ; 21 ; 16 ; 11 ;
- (d) 25 ; 23 ; 21 ; 19 ;
- (e) 43 ; 35 ; 27 ; 19 ;

2. Voltooi die vloedigram.


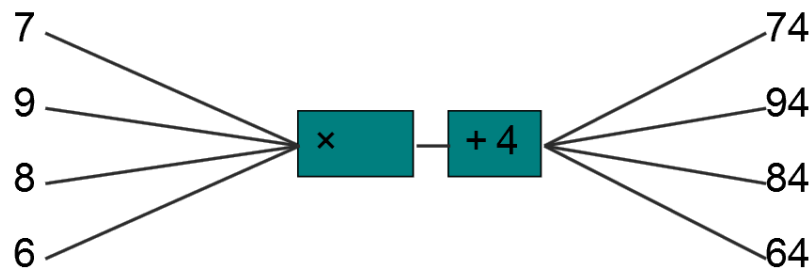
(a)



(b)



(c)

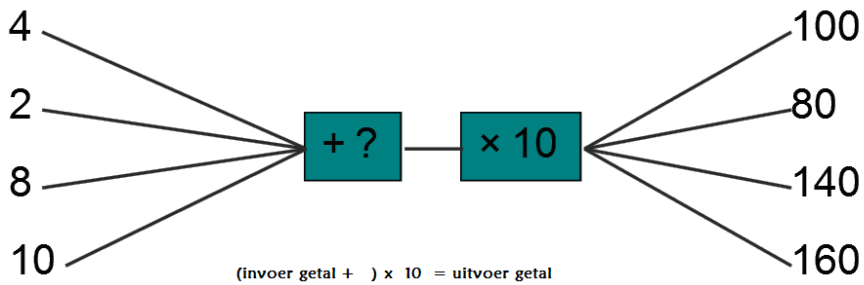




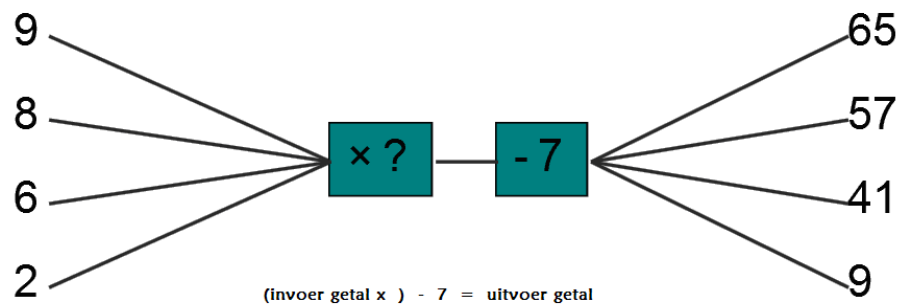
Drukbare assesserings CAMI Wiskunde: Graad 5

3. Voltooi die reël wat nodig word om die vloeiagram te voltooi.


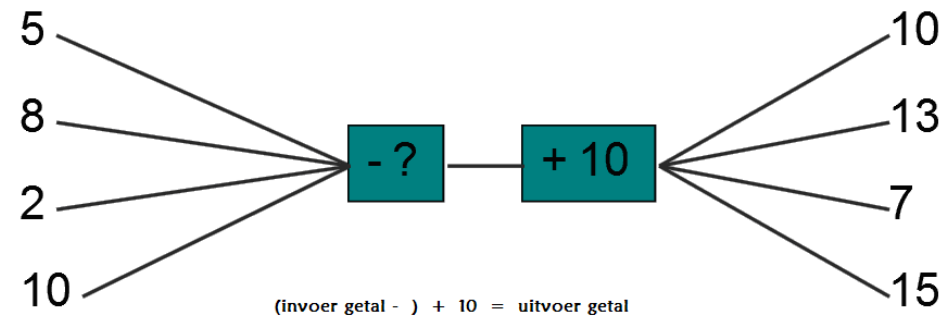
(a)



(b)



(c)





Drukbare assesserings CAMI Wiskunde: Graad 5

MENU

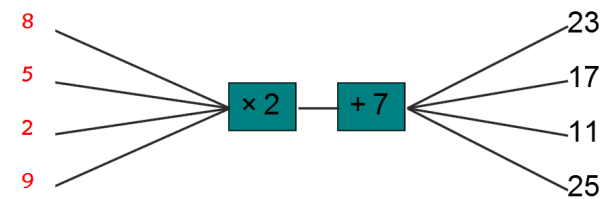
1. Gee die volgende getal in die getalpatroon. [4.1.4.1]

- (a) 29 ; 33 ; 37 ; 41 ; **45**
- (b) 6 ; 12 ; 18 ; 24 ; **30**
- (c) 26 ; 21 ; 16 ; 11 ; **6**
- (d) 25 ; 23 ; 21 ; 19 ; **17**
- (e) 43 ; 35 ; 27 ; 19 ; **11**

2. Voltooi die vloiediagram. [3.2.5.1]

(a) ? = 5

(b)



(c) 10

3. Gee die korrekte reël. [3.2.5.2]

- (a) (invoer getal + **6**) \times 10 = uitvoer getal
- (b) (invoer getal \times **8**) - 7 = uitvoer getal
- (c) (invoer getal - **5**) + 10 = uitvoer getal

