



Drukbare assessering CAMI Wiskunde: Graad 5

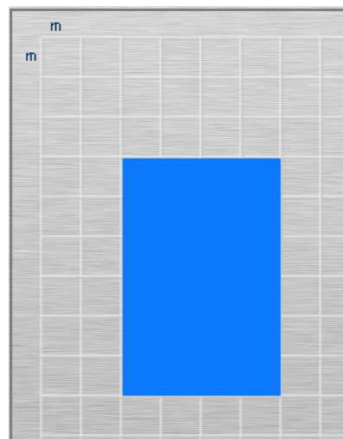
Omtrek, oppervlakte en volume

1. Bepaal die omtrek van die gekleurde reghoek.


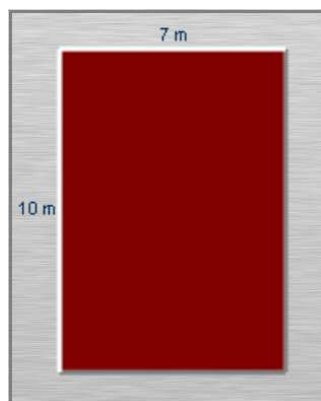
(a) Gee antwoord in cm.



(b) Gee antwoord in mm.




(c) Gee antwoord in m.





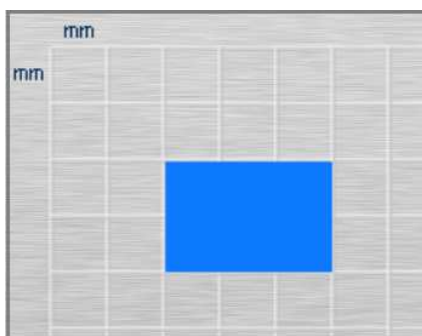
Drukbare assessering CAMI Wiskunde: Graad 5

(d) Gee antwoord in mm.

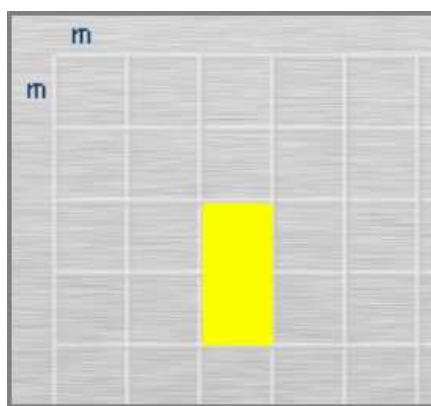


2. Bepaal die oppervlakte van die gekleurde reghoek.

(a) Gee antwoord in cm^2 .





(b) Gee antwoord in cm^2 .





Drukbare assessering CAMI Wiskunde: Graad 5

3. Hoeveel kubieke eenhede word benodig om die houer te vul?
(a)





Drukbare assessering CAMI Wiskunde: Graad 5

MEMO

1. Omtrek. [9.3.1.3; 9.3.1.5]

- (a) 140 cm
- (b) 20 000 mm
- (c) 34 m
- (d) 32 mm

2. Oppervlakte. [9.3.2.3; 9.3.2.4]

- (a) Oppervlakte = lengte x breedte
= 2 mm x 3 mm
= 0.2cm x 0.3cm
= 0.06 cm²
- (b) Oppervlakte = lengte x breedte
= 200 cm x 100 cm
= 20 000 cm²

3. Volume. [9.5.1.3]

- (a) 8 kubieke eenhede

