



Drukbare assessering CAMI Wiskunde: Graad 5


Simmetrie

1. Teken die simmetrie lyne vir die volgende prentjies in.

(a)



(b)



(c)



(d)



(e)



2. Bepaal hoeveel vertikale, horisontale en/of diagonale simmetrie lyne die volgende prentjies het.



Drukbare assessering CAMI Wiskunde: Graad 5

(a)





(b)



(c)



(d)






Drukbare assessering CAMI Wiskunde: Graad 5

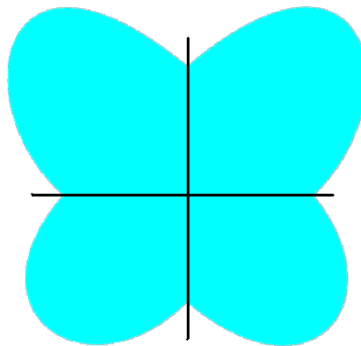
MEMO

1. Voeg die simmetrie lyne by. [8.10.1.4]

(a)




(b)



(c)



(d)



(e)




No symmetry lines

2. Bepaal die hoeveelheid vertikale, horisontale en / of diagonale lyne die prentjies het. [8.10.1.5]




Drukbare assessering CAMI Wiskunde: Graad 5

(a) 1 vertikale lyn



(b) 1 horisontale lyn



(c) 0 lyne



(d) 2 simmetrie lyne

