




Drukbare assessering CAMI Wiskunde: Graad 6


Eienskappe van 2D vorms

1. Benoem die volgende vorms.

(a)



(b)



(c)




(d)



(e)



(f)



2. Teken die volgende hoeke.

(a) Skerp hoek

(b) Regte hoek

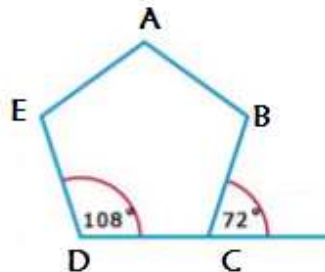
(c) Stomp hoek

(d) Gestrekte hoek

(e) Inspringende hoek

(f) Omwenteling

3. Gebruik die skets om die vrae te beantwoord.



(a) Watter tipe hoek word voorgestel deur \hat{D} ?

(b) Watter figuur word voorgestel deur $ABCDE$?



Drukbare assessering CAMI Wiskunde: Graad 6

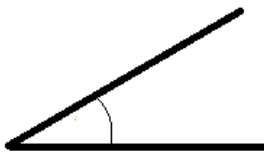
MEMO

1. Benoem die volgende vorms. [8.1.1.4; 8.1.1.5]

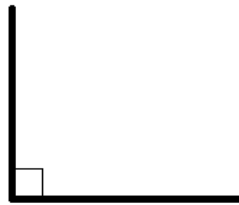
- (a) Triangle
- (b) Square
- (c) Rectangle
- (d) Parallelogram
- (e) Hexagon
- (f) Pentagon

2. Teken die volgende hoeke. [8.1.4.1]

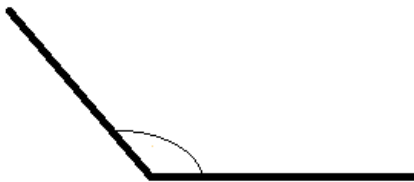
(a)



(b)



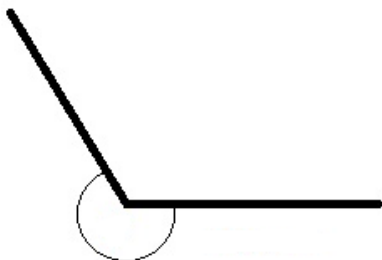
(c)



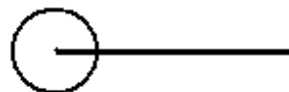
(d)



(e)



(f)



3. Gebruik die skets en beantwoord die vrae.

- (a) Stomp hoek
- (b) Pentagoon



Drukbare assessering CAMI Wiskunde: Graad 6