




# Drukbare assesserings CAMI Wiskunde: Graad 6


## Simmetrie lyne

1. Voeg die vertikale, horisontale en/of vertikale simmetrie lyne in op die figure.


(a)



(b)



(c)



(d)

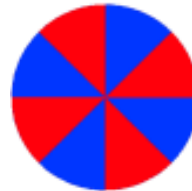


2. Hoeveel vertikale, horisontale en/of vertikale lyne van simmetrie is in elke figuur?

(a)




(b)



(c)



(d)






# Drukbare assesserings CAMI Wiskunde: Graad 6


## MEMO

1. Voeg die vertikale, horisontale en/of vertikale simmetrie lyne in op die figure.  
[8.10.1.1; 8.10.1.2; 8.10.1.3; 8.10.1.4]


(a)



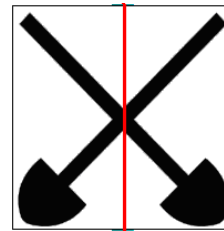
(b)



(c)

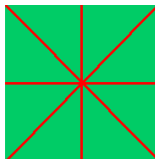


(d)




2. Hoeveel vertikale, horisontale en/of vertikale lyne van simmetrie is in elke figuur? [8.10.1.5]

(a) 4



(b) geen

(c) 1



(d) 2

