



# Printable assessments

## CAMI Mathematics: Grade 4

### 1. Numbers, operations and relationships

#### 1.2 Common Fractions.

1.1 Addition of fractions with same denominators.

(a)  $\frac{4}{5} + \frac{1}{5}$

(d)  $\frac{1}{4} + \frac{2}{4}$

(b)  $\frac{1}{7} + \frac{5}{7}$

(e)  $\frac{1}{3} + \frac{1}{3}$

(c)  $\frac{3}{8} + \frac{4}{8}$

1.2 Add  $<$  ;  $>$  or  $=$  in the following:

(a)  $\frac{1}{8} \dots \frac{1}{5}$

(d)  $\frac{1}{3} \dots \frac{1}{2}$

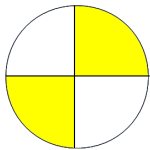
(b)  $\frac{1}{27} \dots \frac{1}{36}$

(e)  $\frac{1}{9} \dots \frac{1}{27}$

(c)  $\frac{1}{2} \dots \frac{1}{2}$

1.3 What fraction of the diagram has been shaded?

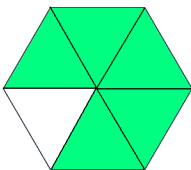
(a)



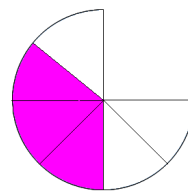
(b)



(c)



(d)





# Printable assessments

## CAMI Mathematics: Grade 4

### MEMO

1.1 Addition of fractions with same denominators. [2.2.2.1]

(a)  $\frac{4}{5} + \frac{1}{5} = \frac{5}{5}$

(d)  $\frac{1}{4} + \frac{2}{4} = \frac{3}{4}$

(b)  $\frac{1}{7} + \frac{5}{7} = \frac{6}{7}$

(e)  $\frac{1}{3} + \frac{1}{3} = \frac{2}{3}$

(c)  $\frac{3}{8} + \frac{4}{8} = \frac{7}{8}$

1.2 Add < ; > or = in the following: [2.2.1.1]

(a)  $\frac{1}{8} < \frac{1}{5}$

(d)  $\frac{1}{3} < \frac{1}{2}$

(b)  $\frac{1}{27} < \frac{1}{36}$

(e)  $\frac{1}{9} > \frac{1}{27}$

(c)  $\frac{1}{2} = \frac{1}{2}$

1.3 What fraction of the diagram has been shaded? [2.1.1.3]

