





Printable assessments

CAMI Mathematics: Grade 4

3. Shape and space

3.1 Properties of 2-D shapes.


1.1 Name the following shapes:



(a) (b) (c) (d)


1.2 Determine the amount of shapes represented in the picture.

(a)



Shape	Number
Circle	
Square	

(b)




Shape	Number
Circle	
Square	
Rectangle	
Triangle	



Printable assessments CAMI Mathematics: Grade 4

(c)



Shape	Number
Circle	
Square	
Rectangle	
Triangle	



Printable assessments

CAMI Mathematics: Grade 4

MEMO

CAMI Exercises: [8.1.1.2; 8.1.1.5]

- 1.1 (a) **Rectangle**
(b) **Circle**
(c) **Square**
(d) **Triangle**

- 1.2 (a)

Shape	Number
Circle	8
Square	1

- (b)

Shape	Number
Circle	4
Square	1
Rectangle	5
Triangle	1

- (c)

Shape	Number
Circle	5
Square	1
Rectangle	6
Triangle	6