



# Printable assessments CAMI Mathematics: Grade 5


## Symmetry

1. Add the symmetry lines to the following pictures.

(a)



(b)



(c)



(d)



(e)



2. Determine how many vertical, horizontal and / or diagonal lines of symmetry does the pictures have.



# Printable assessments CAMI Mathematics: Grade 5

(a)





(b)



(c)



(d)





## Printable assessments CAMI Mathematics: Grade 5

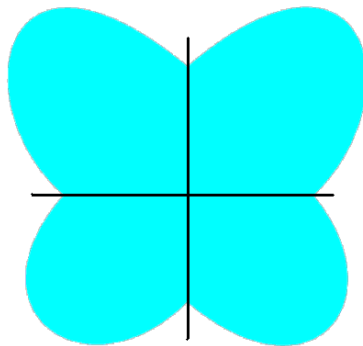
### MEMO

1. Add the symmetry lines to the following pictures. [8.10.1.4]


(a)




(b)



(c)



(d)



(e)




No symmetry lines

2. Determine how many vertical, horizontal and/or diagonal lines of symmetry does the pictures have. [8.10.1.5]




# Printable assessments CAMI Mathematics: Grade 5

(a) 1 vertical line



(b) 1 horizontal line



(c) 0 lines



(d) 2 symmetry lines

