



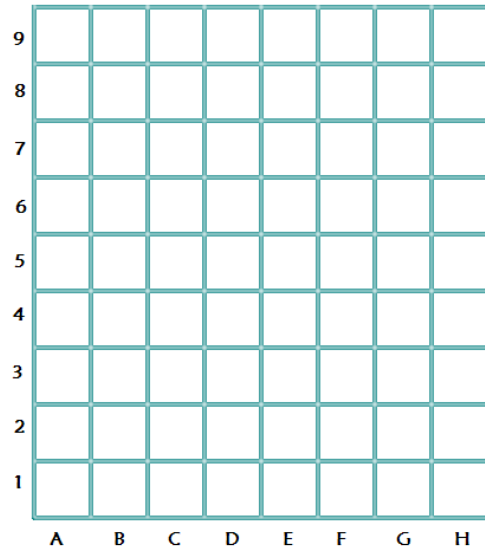

Printable assessments CAMI Mathematics: Grade 6

Locations and directions

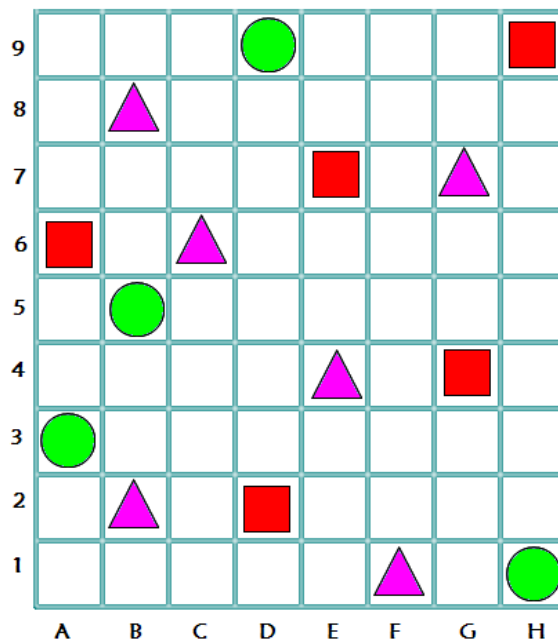
1. Mapping on a grid.

(a) Draw circles on the following blocks:
A3 ; B5 ; D9 ; H1

(b) Draw triangles on the following blocks:
E4 ; G5 ; H2



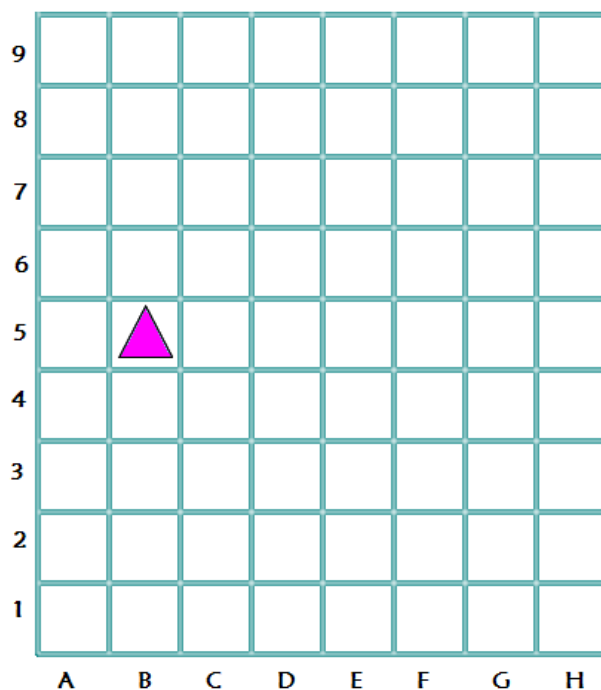
2. Write down the grid coordinates for the red squares.






Printable assessments CAMI Mathematics: Grade 6

3. Use the given grid to answer the questions.



- (a) What will the coordinates be if you move the triangle 3 blocks south and 1 block east?
- (b) What will the coordinates be if you move the triangle 3 blocks north and 5 block east?

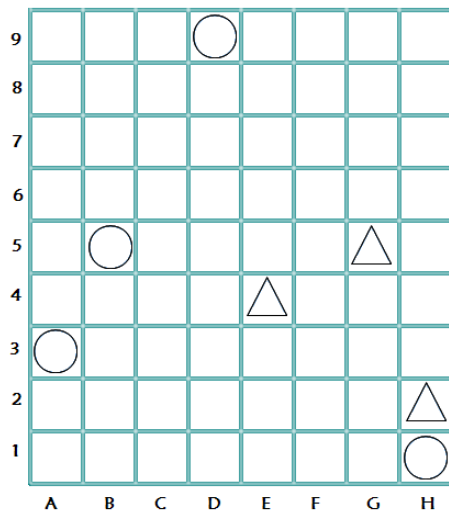




Printable assessments CAMI Mathematics: Grade 6

MEMO

1. Mapping on a grid. [9.6.1.1]



2. Write down the grid coordinates for the red squares. [9.6.1.2]

A6 ; D2 ; E7 ; G4 ; H9

3. Use the given grid to answer the questions. [9.6.1.3]

- (a) C2
- (b) G8

