



Printable assessments CAMI Mathematics: Grade 6

Properties of 3D objects

1. Name the following objects.

(a)



(b)



(c)





(d)



(e)



2. Describe the 3D objects in terms of faces, vertices and edges.

Objects	No. of Faces	No. of Vertices	No. of Edges
			
			





Printable assessments CAMI Mathematics: Grade 6

MEMO

1. Name the following objects. [8.1.2.4]

- (a) Cube
- (b) Triangular prism
- (c) Rectangular prism
- (d) Cylinder
- (e) Pyramid

2. Properties of prisms. [8.1.2.5]

Objects	No. of Faces	No. of Vertices	No. of Edges
	6	8	12
	5	6	9