




# Printable assessments CAMI Mathematics: Grade 6


## Symmetry lines

1. Add the vertical, horizontal and or vertical symmetrical lines to the shapes.


(a)




(b)



(c)



(d)

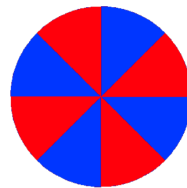


2. How many vertical, horizontal and / or vertical lines of symmetry does each picture have?

(a)




(b)



(c)



(d)






# Printable assessments CAMI Mathematics: Grade 6

## MEMO


1. Add the vertical, horizontal and or vertical symmetrical lines to the shapes.

8.10.1.4 ; 8.10.1.5

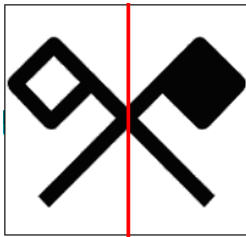
(a)



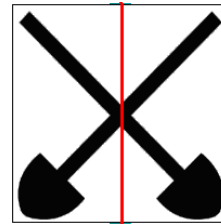
(b)



(c)

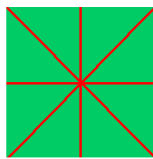


(d)




2. How many vertical, horizontal and / or vertical lines of symmetry does each picture have?

(a) 4



(b) none

(c) 1



(d) 2

