

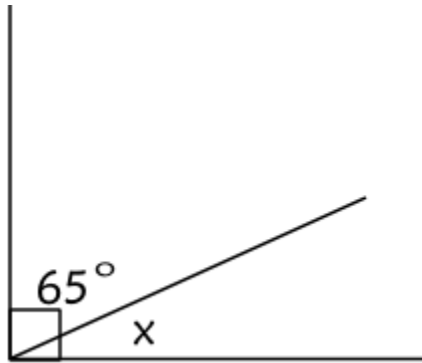


# Drukbare assessering CAMI Wiskunde: Graad 9

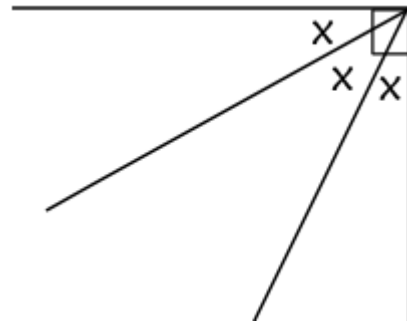
## Meetkunde van reguit lyne

1. Bereken die volgende hoeke.

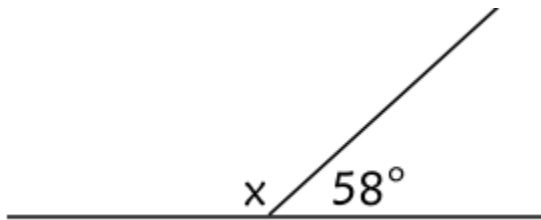
1.1



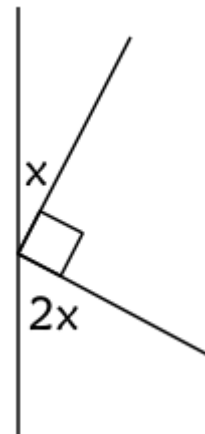
1.2



1.3



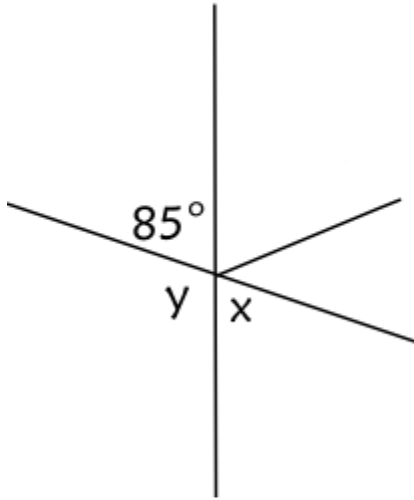
1.4



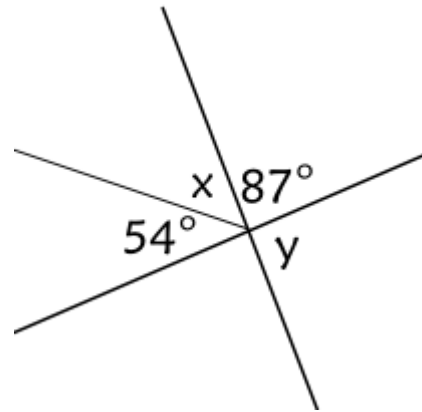


# Drukbare assessering CAMI Wiskunde: Graad 9

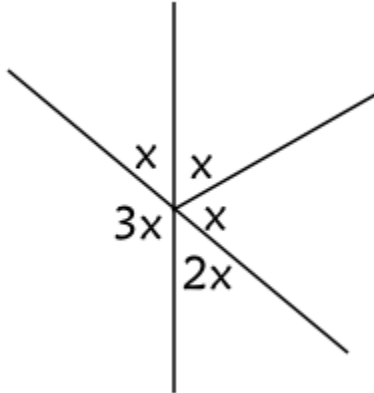
1.5



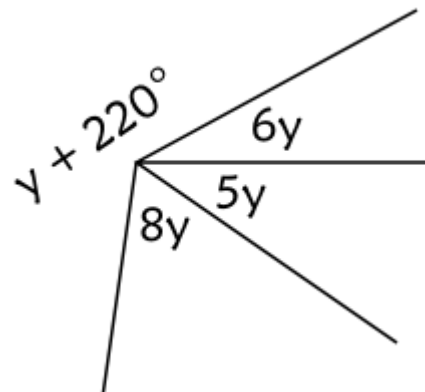
1.6



1.7



1.8





# Drukbare assessering CAMI Wiskunde: Graad 9

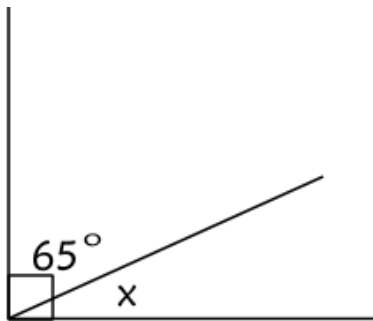


## MEMO

1. Bereken die hoëke.

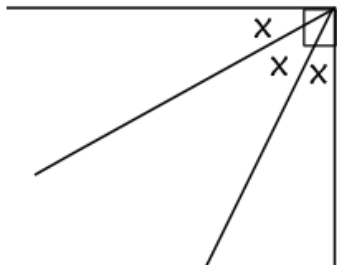
1.1 Komplementêre hoëke

[8.2.1.1; 8.2.1.2]



$$\begin{aligned}x + 65^\circ &= 90^\circ \text{ (kompl. } \angle\text{'e)} \\x &= 90^\circ - 65^\circ \\x &= 25^\circ\end{aligned}$$

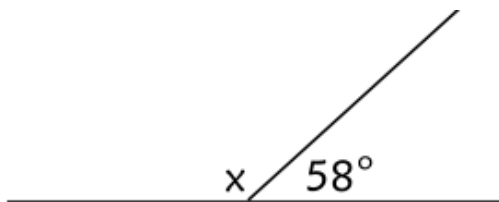
1.2



$$\begin{aligned}x + x + x &= 90^\circ \text{ (kompl. } \angle\text{'e)} \\3x &= 90^\circ \\x &= 30^\circ\end{aligned}$$

1.3 Supplementêre hoëke.

[8.2.2.1; 8.2.2.2]



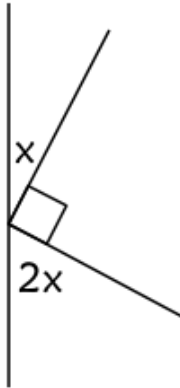
$$\begin{aligned}x + 58^\circ &= 180^\circ \text{ (suppl. } \angle\text{'s)} \\x &= 180^\circ - 58^\circ \\x &= 122^\circ\end{aligned}$$



# Drukbare assessering CAMI Wiskunde: Graad 9



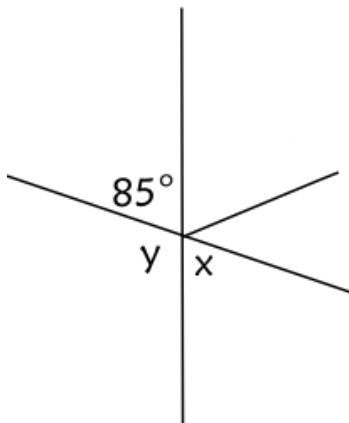
1.4



$$\begin{aligned}x + 90^\circ + 2x &= 180^\circ \text{ (suppl. } \angle\text{'s)} \\3x + 90^\circ &= 180^\circ \\3x &= 180^\circ - 90^\circ \\3x &= 90^\circ \\x &= 30^\circ\end{aligned}$$

1.5 Regoorstaande hoeke.

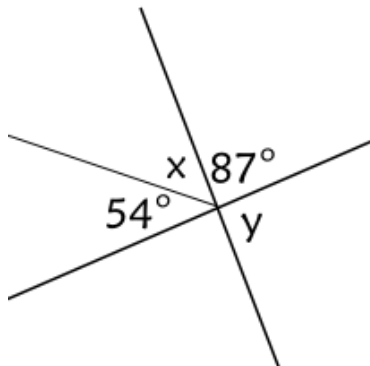
[8.2.3.1; 8.2.3.2]



$$x = 85^\circ \text{ (regoorst. } \angle\text{'e)}$$

$$\begin{aligned}85^\circ + y &= 180^\circ \text{ (suppl. } \angle\text{'s)} \\y &= 180^\circ - 85^\circ \\y &= 95^\circ\end{aligned}$$

1.6



$$\begin{aligned}54^\circ + x + 87^\circ &= 180^\circ \text{ (suppl. } \angle\text{'s)} \\x &= 180^\circ - 54^\circ - 87^\circ \\x &= 39^\circ\end{aligned}$$

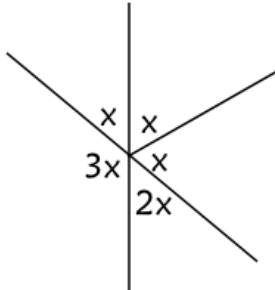
$$\begin{aligned}y &= 54^\circ + x \text{ (regoorst. } \angle\text{'e)} \\y &= 54^\circ + 39^\circ \\y &= 93^\circ\end{aligned}$$



# Drukbare assessering CAMI Wiskunde: Graad 9

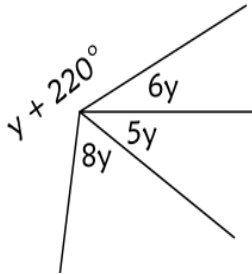
1.7 Hoeke rondom 'n punt.

[8.2.4.1; 8.2.4.2]



$$\begin{aligned}3x + 2x + x + x + x &= 360^\circ \text{ (<'e om punt)} \\8x &= 360^\circ \\x &= 45^\circ\end{aligned}$$

1.8



$$\begin{aligned}(y + 220^\circ) + 8y + 5y + 6y &= 360^\circ \text{ (<'e om punt)} \\20y + 220^\circ &= 360^\circ \\20y &= 360^\circ - 220^\circ \\y &= 7^\circ\end{aligned}$$

